






-
- (ix)  This is used for:
A. Cut B. Copy
C. Paste D. Undo
- (x) Which of the following is a mouse pointer shape?
A.  B. 
C.  D. 
- (xi) Which of the following is the unauthorized use of computer, network and its resources?
A. Programming B. Hacking
C. Stealing D. Robbing
- (xii) Which of the following is a common source of spreading viruses in computer?
A. Infected flash drives or disks B. E-mail attachment
C. Surfing insecure websites D. Installing pirated software
- (xiii) Which of the following is a threat to the computer?
A. Hocker B. Booting
C. Virus D. Debug
- (xiv) Flash drive is also called:
A. UPS B. USB
C. CPU D. ALU
- (xv) Which of the following is an antivirus software?
A. LINUX B. UNIX
C. VLC D. AVG

For Examiner's use only:

Total Marks:

15

Marks Obtained:

1SA 1544(HIC)



(51)

COMPUTER SCIENCE SSC-I

(For Hearing Impaired Children)

Time allowed: 1:00 Hours

Total Marks Section B : 20

NOTE: Answer any five questions from Section 'B' on the separately provided answer book. Use supplementary answer sheet i.e. Sheet-B if required. Write your answers neatly and legibly.

SECTION – B (Marks 20)

Q. 2 Answer any FIVE of the following parts in 3 to 4 lines each. Each part carries 4 marks. (5 x 4 = 20)

- (i) What is the difference between Analog and Digital computer?
- (ii) What is the relationship between Software and Hardware?
- (iii) How many types of software are there? Also write their names.
- (iv) Name any two single-user Interface and two multi-user Interface.
- (v) Describe Microsoft Word.
- (vi) What is Text formatting? Describe character formatting.
- (vii) Write any three functions of Virus when it becomes activated.
- (viii) How does an e-mail virus spread?